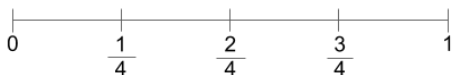


Mage Math


Name: _____

Date: _____

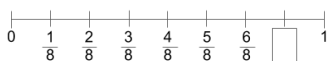
1. What fraction comes before $\frac{2}{4}$ on the number line?



2. What fraction comes after $\frac{1}{3}$ the number line?



3. Write the fraction that is missing from each number line.







4. Write the fraction shown by the star for each number line.









