

Mage Math

Name: _____

Date: _____

In each section, are the two fractions equivalent? Circle yes or no.

1.



yes

no



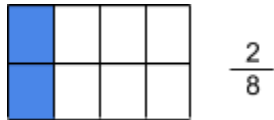
2.



yes

no

3. Shade part of each section's rectangle to make an equivalent fraction. Write the fraction on the line.



4. Write the missing number on the line.

$$\frac{3}{6} = \frac{1}{\square}$$

2

$$\frac{1}{2} = \frac{\square}{4}$$

2

$$\frac{4}{6} = \frac{\square}{3}$$

2

$$\frac{3}{6} = \frac{6}{\square}$$

12

$$\frac{1}{3} = \frac{\square}{9}$$

3

$$\frac{1}{4} = \frac{2}{\square}$$

4

