


Mage Math

Name: _____

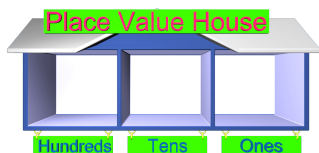
Date: _____

1. Show how many hundreds, tens, and ones are in each number. Write your answer in the place value house.


105



83



624



2. Write the number of hundreds, tens, and ones in the place value house.



3. Write the number that each set of blocks represents.

