





# Mage Math

Name: \_\_\_\_\_

Date: \_\_\_\_\_

1. Complete the table to show the names and values of each coin.

				
Coin Name	Quarter	Nickel	Penny	Dime
Value	25¢	5¢	1¢	10¢

2. What is each set of coins worth?



11¢



42¢



29¢



16¢