





Mage Math

Name: _____

Date: _____

1. Complete the table to show the names and values of each coin.

				
Coin Name				
Value	¢	¢	¢	¢

2. What is each set of coins worth?



_____ ¢



_____ ¢



_____ ¢



_____ ¢